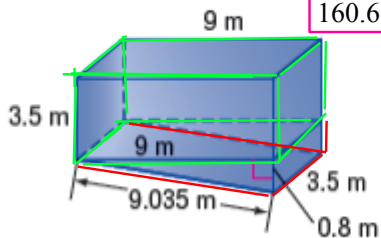


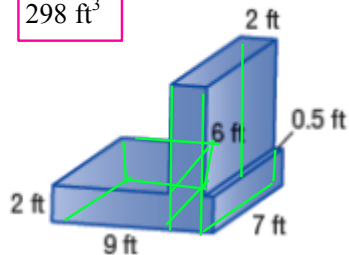
Find the surface area of each composite figure. Round to the nearest tenth if necessary.

5.



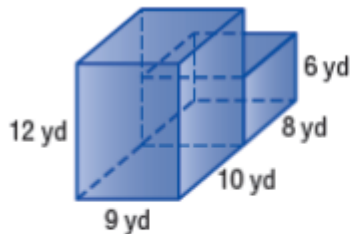
$$160.6 \text{ m}^3$$

6.



$$298 \text{ ft}^3$$

7.



8.

