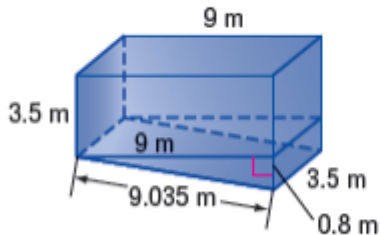


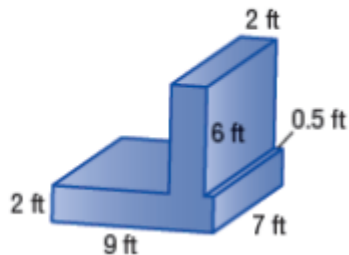
Find the surface area of each composite figure. Round to the nearest tenth if necessary.

5.



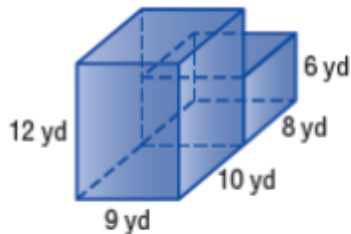
11664m

6.



756ft

7.



8.

