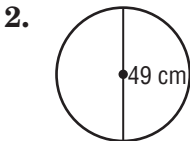
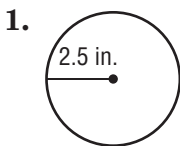


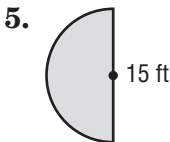
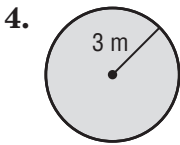
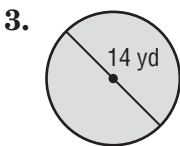
Chapter Quiz

Find the circumference of each circle. Round to the nearest tenth. Use 3.14 or $\frac{22}{7}$ for π .

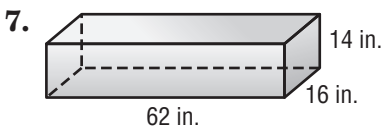
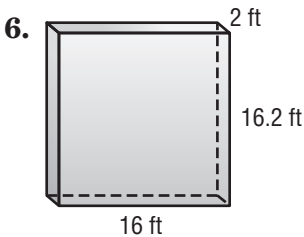
Make sure you use your formulas you took notes on from lesson 1 through lesson 4. Good luck.



Find the area of each figure. Round to the nearest tenth. Use 3.14 or $\frac{22}{7}$ for π .



Find the volume of each figure. Round to the nearest tenth if necessary.



-3 no units listed

-3 not rounding to the nearest 10th

$$\frac{17}{28}$$

1. _____

-3

2. _____

-3

3. ~~43.96~~ _____

-1

4. ~~18.84~~ _____

-1

5. ~~23.55~~ _____

-1

Copyright © The McGraw-Hill Companies, Inc. Permission is granted to reproduce for classroom use.

6. ~~518.4~~ _____

7. ~~13888~~ _____