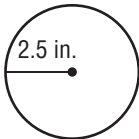


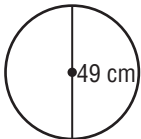
# Chapter Quiz

Find the circumference of each circle. Round to the nearest tenth. Use 3.14 or  $\frac{22}{7}$  for  $\pi$ .

1.



2.

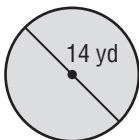


1. \_\_\_\_\_

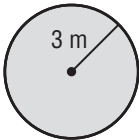
2. \_\_\_\_\_

Find the area of each figure. Round to the nearest tenth. Use 3.14 or  $\frac{22}{7}$  for  $\pi$ .

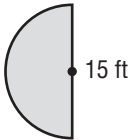
3.



4.



5.



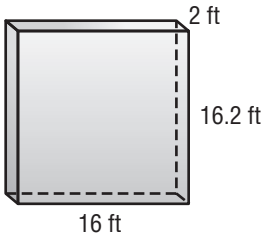
3. \_\_\_\_\_

4. \_\_\_\_\_

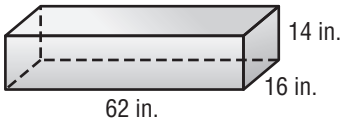
5. \_\_\_\_\_

Find the volume of each figure. Round to the nearest tenth if necessary.

6.



7.



6. \_\_\_\_\_

7. \_\_\_\_\_

Copyright © The McGraw-Hill Companies, Inc. Permission is granted to reproduce for classroom use.