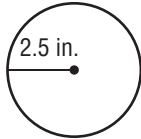


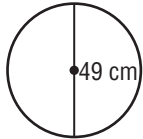
Chapter Quiz

Find the circumference of each circle. Round to the nearest tenth. Use 3.14 or $\frac{22}{7}$ for π .

1.



2.



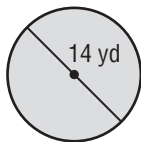
Make sure you use your formulas you took notes on from lesson 1 through lesson 4. Good luck.

1. _____

2. _____

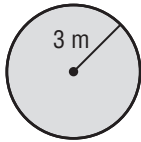
Find the area of each figure. Round to the nearest tenth. Use 3.14 or $\frac{22}{7}$ for π .

3.

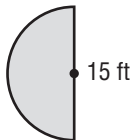


-2 these should be in square units

4.



5.



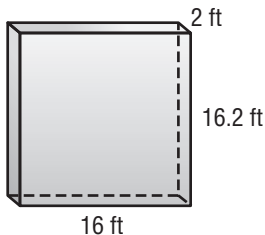
3. _____

4. _____

5. _____

Find the volume of each figure. Round to the nearest tenth if necessary.

6.



-1 these should be in cubic units

7.



6. _____

7. _____