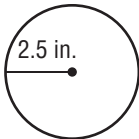


Chapter Quiz

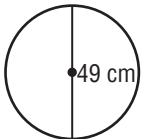
Make sure you use your formulas you took notes on from lesson 1 through lesson 4. Good luck.

Find the circumference of each circle. Round to the nearest tenth. Use 3.14 or $\frac{22}{7}$ for π .

1.



2.



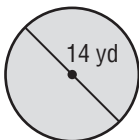
-3 no units listed
-3 not rounding to the nearest 10th

1. ~~19.625~~

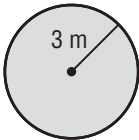
2. ~~7539.14~~

Find the area of each figure. Round to the nearest tenth. Use 3.14 or $\frac{22}{7}$ for π .

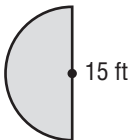
3.



4.



5.



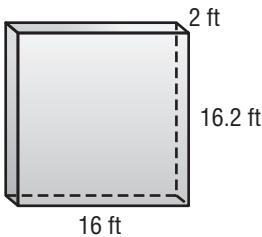
3. ~~113.04~~

4. 28.26

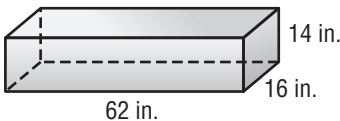
5. ~~706.5~~

Find the volume of each figure. Round to the nearest tenth if necessary.

6.



7.



6. 518.4

7. 13888

Copyright © The McGraw-Hill Companies, Inc. Permission is granted to reproduce for classroom use.