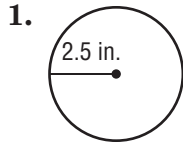


## Chapter Quiz

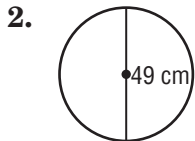
Make sure you use your formulas you took notes on from lesson 1 through lesson 4. Good luck.

Find the circumference of each circle. Round to the nearest tenth. Use 3.14 or  $\frac{22}{7}$  for  $\pi$ .

-3 for not rounding to the nearest 10th

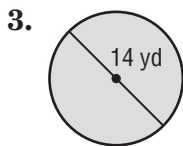


1. =15.7 in

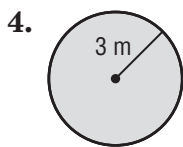


2. =153.86 cm

Find the area of each figure. Round to the nearest tenth. Use 3.14 or  $\frac{22}{7}$  for  $\pi$ .

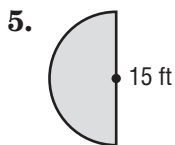


3. =153.86 yd



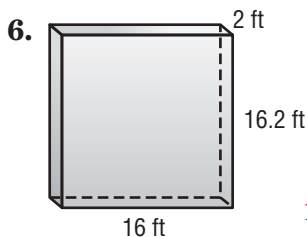
-2 units not squared

4. =28.26 m



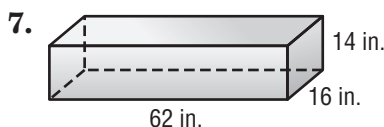
5. =176.625 ft

Find the volume of each figure. Round to the nearest tenth if necessary.



i'll give this to you, I believe you forgot

6. =518.4 cubed ft



7. =13,888 in cubed